

Name _____
Honors Physics
Period _____


Date _____
Vectors/Projectiles WS #1H
Mrs. Nadworny

(10 pts)

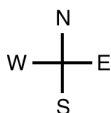
Measuring Vectors

Directions – Read textbook page 84. Measure the magnitude and direction of the following vectors using the given scales. Place your answers in the provided spaces.

1.

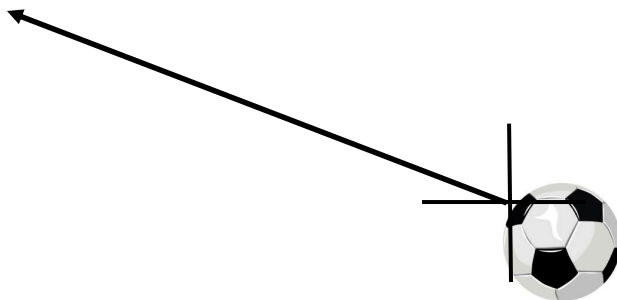


1cm = 450 km



d = _____ km at _____° ____ of ____

2. 1 cm = 5 m/s



v = _____ m/s at _____°