

Name _____
 Honors Physics
 Period _____


Date _____
 Vectors/Projectiles WS #1H
 Mrs. Nadworny

(20 pts)

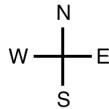
Drawing Vectors

Directions – Read textbook page 84. Measure the magnitude and direction of the following vectors using the given scales. Place your answers in the provided spaces.

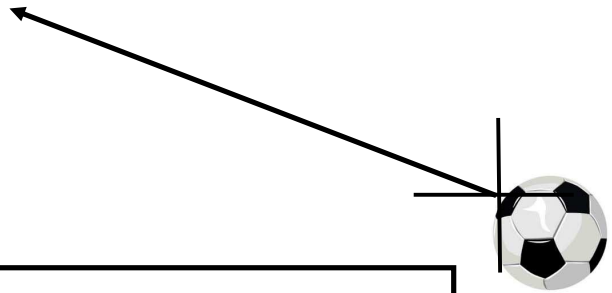
1.



1 cm = 450 km



2. 1 cm = 5 m/s



d = _____ km at _____° ___ of ___

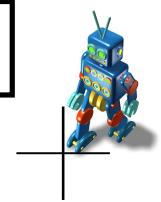
v = _____ m/s at _____°

Directions – Draw the following vectors using the appropriate method learned in class.

3.

A robot travels 60. km at 35° South of West

Scale: 1 cm = _____ km



4.

A box is dragged to the left with a force of 48 N at an angle of 20.° above the horizon.

Scale: _____

